



Wie viel kommt weg?





1. Streiche weg und rechne.


a) 
 $7 - \boxed{3} = 4$


b) 
 $5 - \boxed{} = 2$

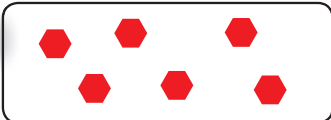
c) 
 $9 - \boxed{} = 5$


d) 
 $9 - \boxed{} = 3$


e) 
 $3 - \boxed{} = 0$


f) 
 $6 - \boxed{} = 3$


g) 
 $8 - \boxed{} = 4$

h) 
 $6 - \boxed{} = 1$

i) 
 $2 - \boxed{} = 0$

j) 
 $4 - \boxed{} = 3$

k) 
 $7 - \boxed{} = 2$

l) 
 $9 - \boxed{} = 2$

2. Setze die fehlenden Zahlen ein.

a) $5 - \boxed{} = 2$

f) $8 - \boxed{} = 3$

k) $1 - \boxed{} = 0$

p) $8 - \boxed{} = 5$

b) $9 - \boxed{} = 7$

g) $3 - \boxed{} = 2$

l) $5 - \boxed{} = 3$

q) $5 - \boxed{} = 4$

c) $2 - \boxed{} = 0$

h) $4 - \boxed{} = 2$

m) $7 - \boxed{} = 6$

r) $6 - \boxed{} = 3$

d) $6 - \boxed{} = 2$

i) $7 - \boxed{} = 3$

n) $9 - \boxed{} = 5$

s) $9 - \boxed{} = 6$

e) $4 - \boxed{} = 3$

j) $9 - \boxed{} = 3$

o) $3 - \boxed{} = 3$

t) $7 - \boxed{} = 1$