




# Übungen bis 7

## Übungen bis 7








## Übungen bis 7

Vervollständige die Zeilen:

|  |  |
|--|--|
|  |  |
|  |  |
|  |  |

Schreibe die Anzahl in die Kästchen:



|   |   |   |   |  |   |   |
|---|---|---|---|--|---|---|
|  |  |  |  |  |  |  |
| <input style="width: 60px; height: 40px;" type="text"/>                             | <input style="width: 60px; height: 40px;" type="text"/>                             | <input style="width: 60px; height: 40px;" type="text"/>                             | <input style="width: 60px; height: 40px;" type="text"/>                             | <input style="width: 60px; height: 40px;" type="text"/>                              | <input style="width: 60px; height: 40px;" type="text"/>                               | <input style="width: 60px; height: 40px;" type="text"/>                               |

Rechne:

- $6 + 1 = \underline{\quad}$
- $5 + 2 = \underline{\quad}$
- $3 + 4 = \underline{\quad}$
- $0 + 7 = \underline{\quad}$
- $1 + 6 = \underline{\quad}$
- $2 + 5 = \underline{\quad}$
- $4 + 3 = \underline{\quad}$
- $7 + 0 = \underline{\quad}$



- $7 - 0 = \underline{\quad}$
- $7 - 1 = \underline{\quad}$
- $7 - 2 = \underline{\quad}$
- $7 - 3 = \underline{\quad}$
- $7 - 4 = \underline{\quad}$
- $7 - 5 = \underline{\quad}$
- $7 - 6 = \underline{\quad}$
- $7 - 7 = \underline{\quad}$