

Groß, größer, der Größte

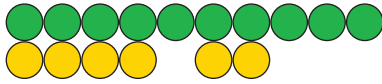
1. Plusrechnen:



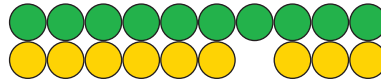
$4 + 2 = \square$



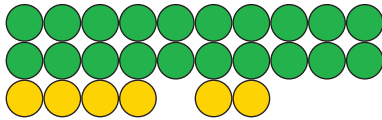
$6 + 3 = \square$



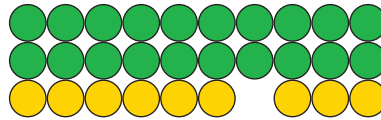
$14 + 2 = \square$



$16 + 3 = \square$



$24 + 2 = \square$



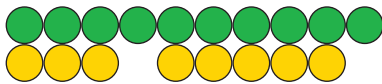
$26 + 3 = \square$



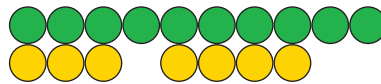
$3 + 5 = \square$



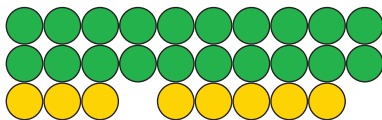
$3 + 4 = \square$



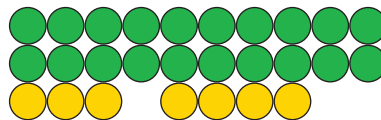
$13 + 5 = \square$



$13 + 4 = \square$



$23 + 5 = \square$



$23 + 4 = \square$

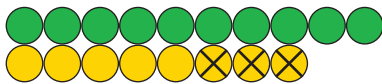
2. Minusrechnen:



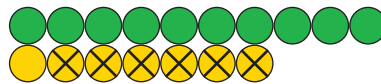
$8 - 3 = \square$



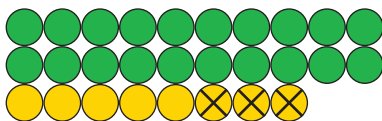
$7 - 6 = \square$



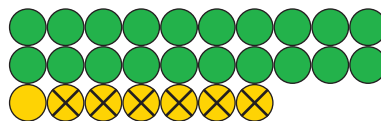
$18 - 3 = \square$



$17 - 6 = \square$



$28 - 3 = \square$



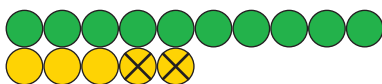
$27 - 6 = \square$



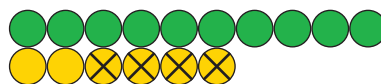
$5 - 2 = \square$



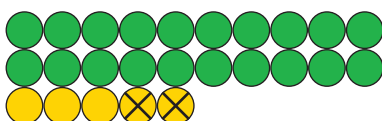
$6 - 4 = \square$



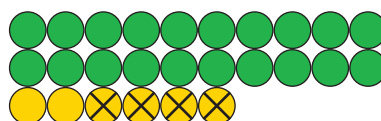
$15 - 2 = \square$



$16 - 4 = \square$



$25 - 2 = \square$



$26 - 4 = \square$