


Das Einmaleins mit 2

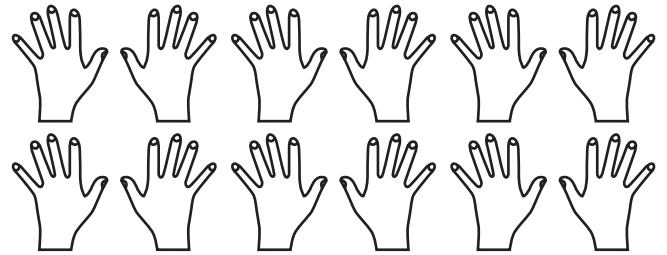
1. Welche der beiden Familien hat mehr Mitglieder:

Familie Ritter



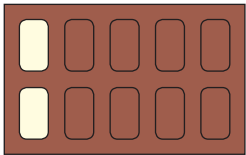
___ x 2 = ___

Familie Maier

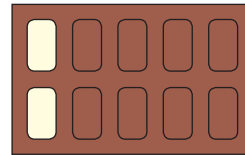
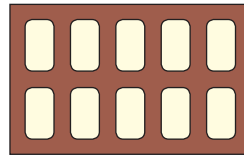


___ x 2 = ___

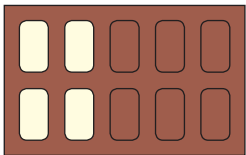
2. Einmaleins mit 2:



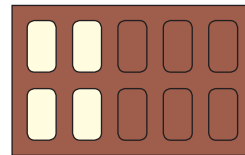
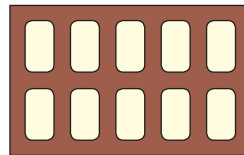
1 x 2 = ___



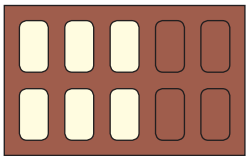
6 x 2 = ___



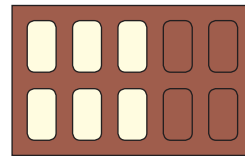
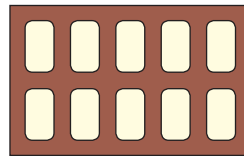
2 x 2 = ___



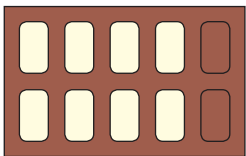
7 x 2 = ___



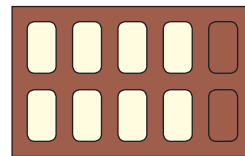
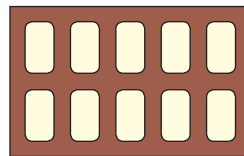
3 x 2 = ___



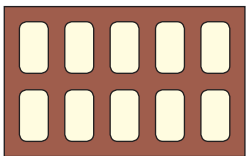
8 x 2 = ___



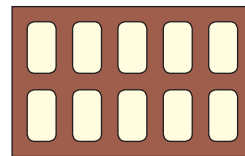
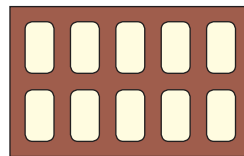
4 x 2 = ___



9 x 2 = ___



5 x 2 = ___



10 x 2 = ___

3. Für jede richtig gelöste Aufgabe bekommst du einen Punkt:

0 x 2 = ___

3 x 2 = ___

4 x 2 = ___

7 x 2 = ___

1 x 2 = ___

8 x 2 = ___

4 x 2 = ___

8 x 2 = ___

0 x 2 = ___

6 x 2 = ___

2 x 2 = ___

9 x 2 = ___

9 x 2 = ___

5 x 2 = ___

6 x 2 = ___

